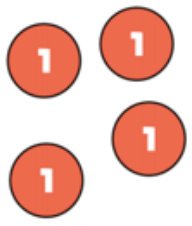




Use the place value chart to find the to answer $4.33 - 2.14$

Ones	Tenths	Hundredths
		

$$\begin{array}{r}
 4.33 \\
 - 2.14 \\
 \hline
 \\
 \hline
 \end{array}$$

Use the column method to answer these questions.

$$\begin{array}{r}
 6.4 \\
 - 3.8 \\
 \hline
 \\
 \hline
 \end{array}$$

$$\begin{array}{r}
 5.05 \\
 - 2.15 \\
 \hline
 \\
 \hline
 \end{array}$$

Jack has £12.54 in his wallet.
He buys a football which costs £5.82



How much money does he have left?

- 1.) Chloe wants to buy $332\frac{1}{4}$ metres of red fabric. The shopkeeper says he has only 289.8m left. How much short is this of what Chloe wants?
- 2.) The next day, Robbie buys a loaf of bread costing £1.09, some apples costing £1.85, and some cheese costing 77p. He hands the shopkeeper a £5 note and receives £1.29 in change. Is this the correct change?

Complete the pyramid

In this number pyramid, each number is calculated by adding the two numbers underneath.

