


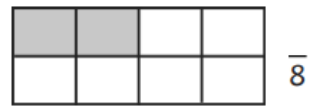
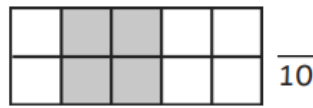
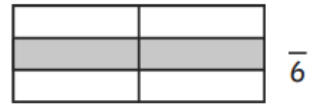



Y3 Maths 15.1.21

Equivalent Fractions (If you can't print the shapes you could draw them).

Write the shaded fraction for each rectangle. Cut each section out. Match the rectangles with the equivalent amount shaded and stick each equivalent set together in your book.



Draw the shapes and colour the equivalent fraction.

