

15.01.21

1. I have started ordering numbers. Look at the numbers given can you make them go in order from smallest to largest?

25

12

8

2

\_\_\_\_\_

\_\_\_\_\_

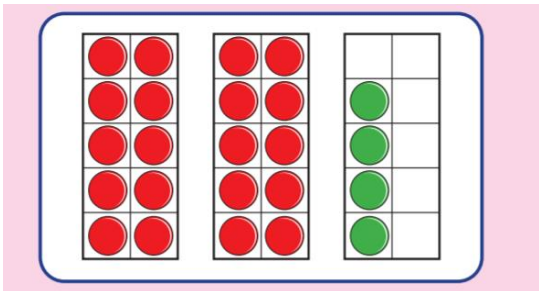
\_\_\_\_\_

55

Smallest

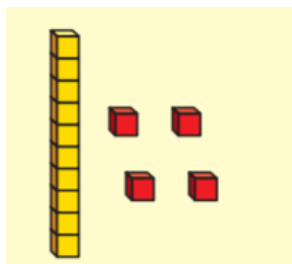
largest

2. Look at these pictures that represent numbers. Can you write the numbers and order them from largest to smallest?



\_\_\_\_\_

\_\_\_\_\_



\_\_\_\_\_

\_\_\_\_\_

\_\_\_\_\_

\_\_\_\_\_

Largest

smallest

3.

Three children were playing basketball.  
The scoreboard shows how many hoops they scores each.  
The winner is the child who scores the most hoops.







Eva: 9
Jack: 16
Tommy: 13

Place the children in 1<sup>st</sup>, 2<sup>nd</sup> and 3<sup>rd</sup>

1<sup>st</sup> \_\_\_\_\_ 2<sup>nd</sup> \_\_\_\_\_ 3<sup>rd</sup> \_\_\_\_\_

4.

Complete the image and match the numerals to the correct picture.

Order the numbers in each group from smallest to largest.

Order all of the numbers from smallest to largest.