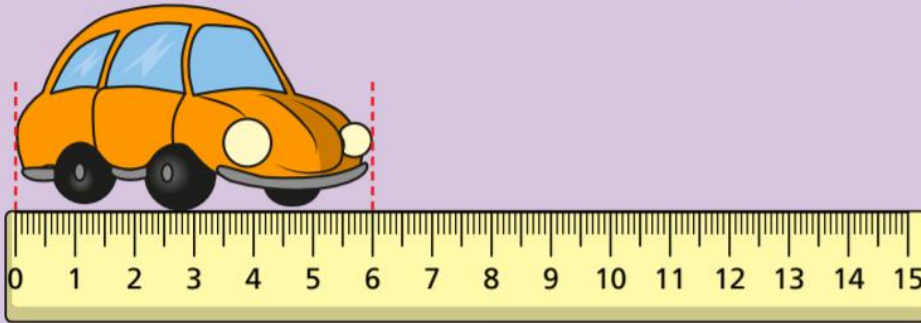
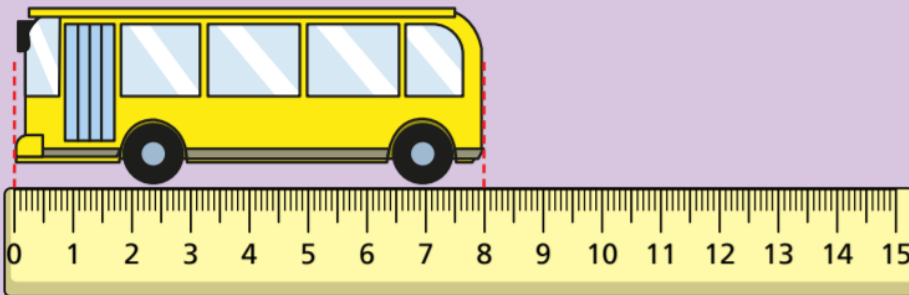


LO: To begin to understand measuring in cms.

Ron measures some objects.




The car is cm long.



The bus is cm long.

Is this true or false?


The train is 12 cm long.



true

false

Which straw is the tallest?



The blue straw is 6 cm tall.

The red straw is 8 cm tall.

The red straw is the tallest.

The blue straw is the shortest.

1


Eva, Dexter and Rosie are comparing ribbons that they have.

Unfortunately, Dexter has lost his ribbon.

He says,

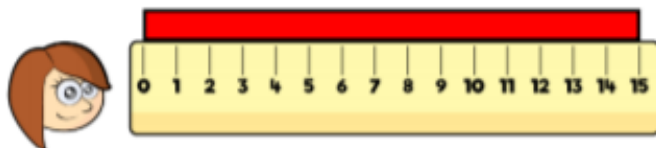


My ribbon is shorter than Rosie's, but longer than Eva's.



Eva


11 cm



12 cm

Rosie

13 cm



14 cm

Dexter

How long could Dexter's ribbon be?