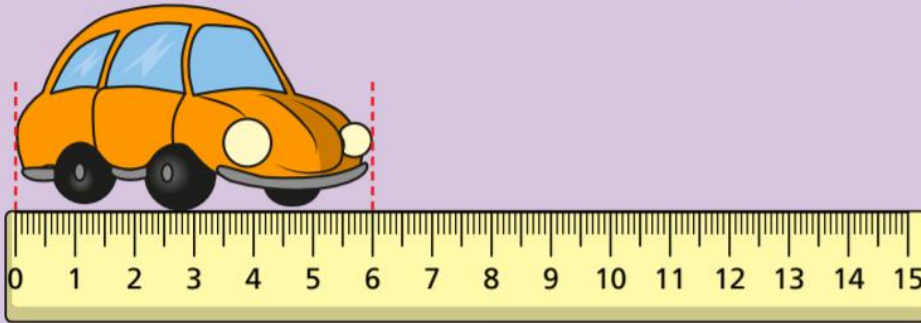
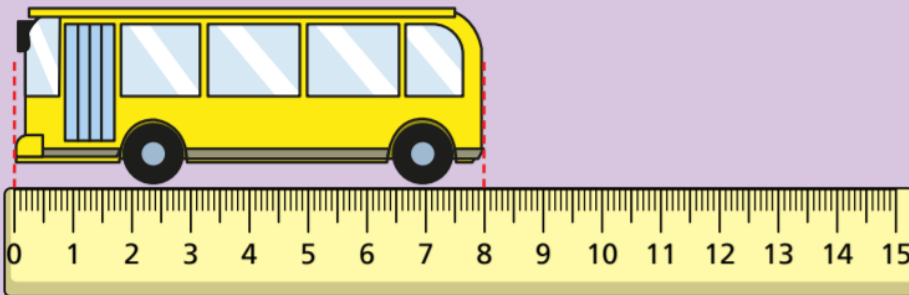


LO: To begin to understand measuring in cms.

Ron measures some objects.




The car is cm long.



The bus is cm long.

Is this true or false?

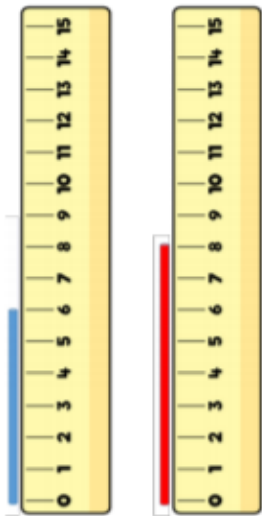
The train is 12 cm long.



true

false

Which straw is the tallest?



The blue straw is cm tall.

The red straw is cm tall.

The straw is the tallest.

The straw is the shortest.

1


Eva, Dexter and Rosie are comparing ribbons that they have.

Unfortunately, Dexter has lost his ribbon.

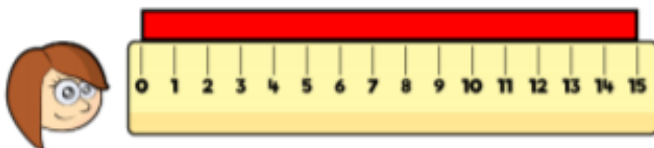
He says,




My ribbon is shorter than Rosie's, but longer than Eva's.



Eva



Rosie



Dexter

How long could Dexter's ribbon be?